





**SATISH CHANDRA MEMORIAL SCHOOL**

**CLASS 3 (MATHEMATICS)**




**CH : WHO IS HEAVIER?**

**FTRWS : 4**

1. Circle the heavier object shown in the table :

<p>a.</p> 	<p>b.</p> 
<p>c.</p> 	<p>d.</p> 

2. Put > or < sign to show if the objects are more than 1 kg or less than 1 kg Weight.

Object	< or >	
Oil Tin 		1Kg
Bouquet 		1Kg
Tea 		1Kg

3.

) The big frog weighs 2 Kg, the small frog weighs less than 1 Kg. Can you tell how much the medium-sized frog weighs?



More than 2 Kg but less than 1 Kg  
or  
More than 1 Kg but less than 2 Kg

4. There are 4 members in a family . Mother weighs 54 kg ,Father weighs 70 kg ,girl weighs 32 kg ,and the boy weighs 28 kg .

i) Arrange their weights in ascending order .

ii) If everyone gain 5kg weight during lockdown period , what will be their total weight after lockdown ?

5. Activity: Suppose you went for a picnic , and you have taken the responsibility of carrying some vegetables and playing kits and fruits .

If the total number of members in the picnic is 25 .

Make a list of items and their weights ( guess the weight)--- you will carry ?

Find the total weight also?

[ **Instructions:** At least 5 items names you have to write the list ]