

SATISH CHANDRA MEMORIAL SCHOOL

CLASS 3 [MATHEMATICS]

CH: SHAPES & DESIGNS

RECAPITULATION-1

F.T.R.W.S-16

1. A _____ has no end points.

- a) Line b) Line segment c) Ray

2. A indicates a definite location or position.

- a) Line b) Point c) Line segment

3. A ray has definite length .

- a) no b) cannot be determined c) yes

4. Opposite sides of a rectangle are in length.

- a) equal b) unequal c) cannot be determined

5 . Mark the correct statement :

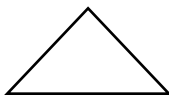
a) A square has 3 corners .

b) A circle has one side .


c) A triangle has 3 sides .

6. Which one of the following is different from the other two?

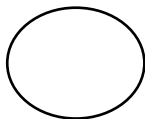
a)



b)



c)



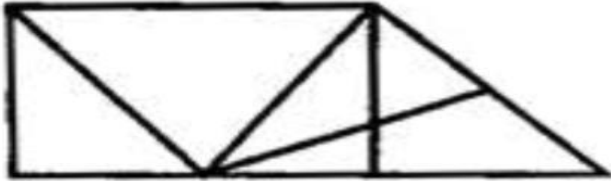
7. Fill the box :

Name of the 2D shapes	No. Of sides	No. Of vertices	No. Of angles
TRIANGLE			
SQUARE			
RECTANGLE			
CIRCLE			

8. What type of shapes contained by this fig.



9. How many triangles are there in given figure?



10. Draw the following shapes with the help of pencil and ruler:

- a) A Triangle
- b) A Square
- c) A rectangle
- d) A line segment