

SATISH CHANDRA MEMORIAL SCHOOL  
WORKSHEET - MATHS



NAME -

CLASS - LKG

SECTION -

ROLL -


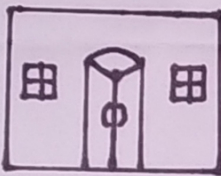
1. Write **L** for Long and **S** for Short object in the given box



2. Write **B** for Bigger and **S** for Smaller object in the given box.



3. Draw and complete the missing part of the picture by using shapes.



4. Complete the missing pattern.



5. Circle the correct answer.

$7 + 2 = 7$     9    4    5

$3 + 6 = 10$     5    8    2

$4 - 1 = 2$     3    4    5

$6 - 3 = 1$     2    3    4