

Mathematics

Quiz on overall syllabus (M.C.Q)

Q.1 The alphabets having more than two lines of symmetry

a) N

b) X

c) H

d) A

Q.2 What will be the time 2 hours after 12 midnight?

a) 2 p.m

b) 2 a.m

c) 14 p.m

d) None of these

Q.3 The alphabet having mirror image same with its original image is

a) K

b) L

c) R

d) H

**Q.4 Total number of flat faces in 5 cubes ,
6 cylinders, and 4 cones ?**

a) 42

b) 46

c) 47

d) 48

Q.5 Complete the pattern:

A2 , C4 , E6 , G8 ,.....

a) I10

b) K12

c) H10

d) H9

Q.6 Which is incorrect?

a) $4567 > 4000 + 400 + 70 + 6$

b) $123 = 100 + 20 + 3$

c) $459 = 400 + 90 + 5$

d) $125 = 100 + 20 + 5$

Q.7 How many 50 p are there in ₹ 10 ?

a) 20

b) 25

c) 45

d) 40

Q.8 Fill up : + 78 = 78

a) 1

b) 0

c) 10

d) 78

Q.9 If we multiply any number by 0 , then we will get


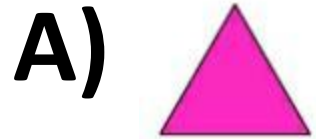

a) 1

b) Infinite

c) Number itself

d) 0

Q.10 Find the 9th term of the pattern :



Q.11 The successor of the predecessor of 1 is ...

a) 0

b) 2

c) 1

d) 100

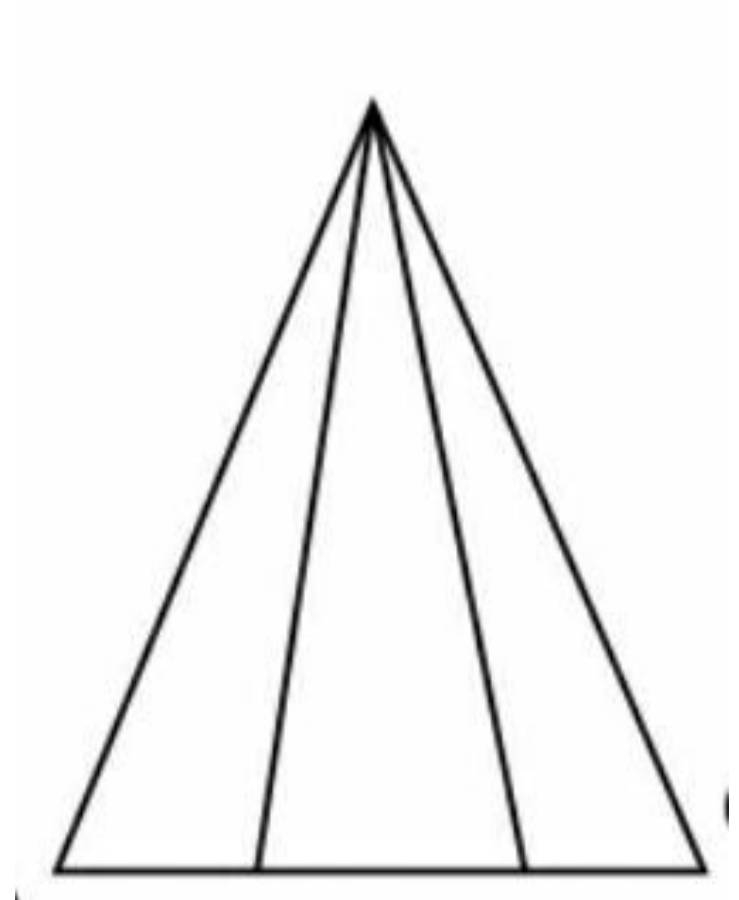
Q.12 Count the triangle in the figure...

A) 6

B) 5

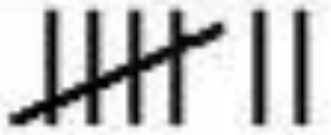
C) 10

D) None of these



Q.13 which one represents 7 ?

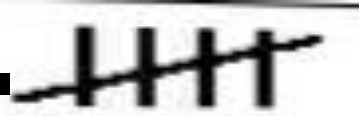
A.



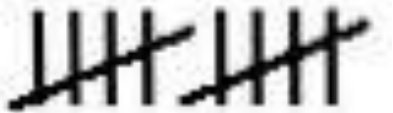
B.



C.



D.



Q.14 How many 50 p are there in ₹50 ?

A) 100

B) 10

C) 1000

D) 10000

Q.15 The SI UNIT OF LENGTH IS

A) KM

B) M

C) CM

D) MM