

**SATISH CHANDRA MEMORIAL SCHOOL**

**CLASS: III SUBJECT: MATHEMATICS**

**SESSION: 2020-2021**

**MENTAL MATHS AND REASONING  
WORKSHEET**

**1) Find the missing numbers:**

**i)**

|    |    |    |
|----|----|----|
| 6  | 12 | 18 |
| 24 | 30 | ?  |
| 42 | 48 | 54 |

**a) 81    b) 36    c) 90**

**iii)**

|    |    |    |
|----|----|----|
| 10 | 16 | 24 |
| 32 | 40 | 48 |
| ?  | 56 | 72 |

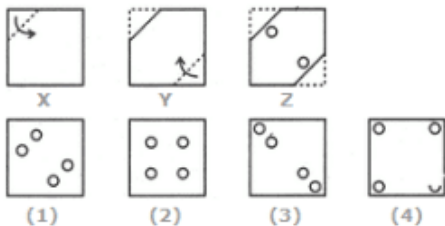
**a) 56    b) 42    c) 44**

**ii)**

|   |   |   |
|---|---|---|
| 9 | 8 | 7 |
| 5 | 4 | 3 |
| 4 | 4 | ? |

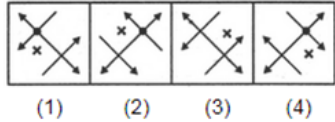
**a) 5    b) 7    c) 4**

**2) A sheet of paper is folded from two sides (shown with an arrow) and punched. Find the pattern after the paper is unfolded.**



3) Find the mirror image

a)

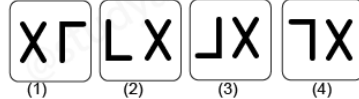


b) Here blue line XY is the plane mirror.

Question figure:



Answer figures:




4) Mirror image of "WOW"

a) MOM    b) WOW    c) MOW

5) What is the sum of place value and face value of the underlined digit? 5676

a) 66    b) 606    c) 666


6) Which is heavier?



a) A    ☐

b) B    ☐

7) If you fold the line, will Red area match Green area?



a) Yes ☐

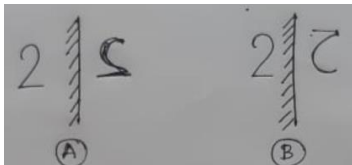
b) No ☐

8)  $110 + 10$    $150 - 30$

a) True ☐

b) False ☐

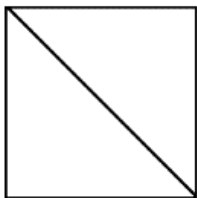
9) Which is correct?



a) ☐

b) ☐

10) Is the square symmetrical along the line?



a) Yes ☐

b) No ☐