

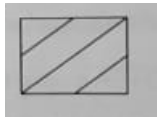
SATISH CHANDRA MEMORIAL SCHOOL

CLASS 3 SUB: MATHEMATICS

MENTAL MATHS AND REASONING (MMRWS2)

CHOOSE THE CORRECT ANSWER:

1) COUNT THE NUMBER OF TRIANGLES:



A) 4

B) 5

2) COUNT THE NUMBER OF TRIANGLES:

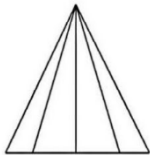


A) 10

B) 8

3)

3) COUNT THE NUMBER OF TRIANGLES:



A) 10

B) 12

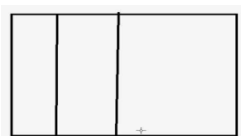
4) COUNT THE NUMBER OF RECTANGLES:



A) 9

B) 10

5) COUNT THE NUMBER OF RECTANGLES:



A) 7

B) 6