

# SATISH CHANDRA MEMORIAL SCHOOL

NAME -







CLASS -

SEC -

ROLL -

SUBJECT - MATHS (WORKSHEET)

Q1. Tick (✓) the odd one out :-




Q2. Colour the numbers that comes after 8 ~


a. 17 - (24) (35) (18)

b. 49 - (5) (50) (15)


Q3. Count the numbers of red balls, blue balls and yellow balls from the box and then draw the balls in the jar, then Tick (✓) the Jar that has more numbers of balls :-



Red



Yellow



Blue

