
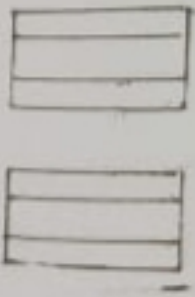


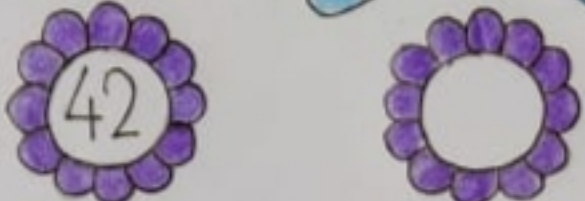

SATISH CHANDRA MEMORIAL SCHOOL

MATHS - WORKSHEET

Name - _____ Class - LKG Sec - _____ Roll - _____

1. See the picture. Write the after number and after phonic sound in small cursive.

a.  

b.  

2. Write the between numbers. Count the number of circles and write it in the balloon.

