

# SATISH CHANDRA MEMORIAL SCHOOL

NAME -


CLASS -

SEC -

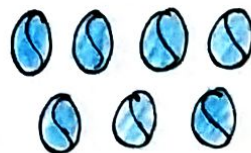

ROLL -

SUB - WORKSHEET (MATHS)

Q1. Colour and count the total number of circles present in the picture :-



2. Count the numbers of given objects and write the numbers in the box. Circle the objects which are more in numbers in each set.



3. Circle the numbers that comes between 70-80 :-

68	54	71	27	75
78	84	16	72	
20	73	55	82	11
34		74		76