

The background features abstract, overlapping geometric shapes in various shades of pink and purple, primarily concentrated on the right side of the frame. The shapes are semi-transparent, creating a layered effect. The text is centered in the white space on the left.

ACTIVITY - 5

CH7: TIME GOES ON

1) HOW MANY MONTHS ARE THERE IN A YEAR? (12/15)

ANS. 12

2) A LEAP YEAR HAS DAYS (365/366).

ANS. 366

3) GIVE EXAMPLE OF TWO MONTHS WHICH HAS 30DAYS EACH.

ANS. APRIL , JUNE , SEPTEMBER , NOVEMBER. (ANY TWO)

4) INDIAN INDEPENDENCE MONTH IS OF DAYS.

ANS. 31 DAYS

5) THE LONGER HAND OF THE CLOCK IS CALLED.....

ANS. MINUTE HAND.

6) A CLOCK HAS HANDS (2/3).

ANS. 3 HANDS

7) ONE HOUR HAS MINUTES.

ANS. 60 MINUTES

8) ONE YEAR HAS WEEKS.

ANS. 52 WEEKS (APPROXIMETLY)

9) A DAY HAS HOURS.

ANS. 24 HOURS

10) LOOK AT CLOCK AND READ THE TIME

A) 30 MINUTES PAST 5 O'CLOCK

B) 9 O'CLOCK

C) 15 MINUTES PAST 7 O'CLOCK

D) 25 MINUTES PAST 8 O'CLOCK

ACTIVITY - 5

- ▶ WRITE YOUR NAME , CLASS , SECTION , ROLL NO. , ID NO. AND DATE ON THE TOP OF THE SHEET.
- ▶ DRAW MARGINE AND INSIDE THE MARGINE , AT THE TOP WRITE ACTIVITY - 5.

TOPIC: DRAW A CLOCK AND SHOW THE TIME 3:45

- IF YOU WISH ,YOU CAN DECORATE THE CLOCK AS PER YOUR CHOICHE
- ▶ CLICK A PICTURE OF THE ACTIVITY -5
- ▶ CONVERT IT INTO A PDF.
- ▶ RENAME IT WITH YOUR NAME, CLASS , SEC , ROLL.
- ▶ SEND THE PDF TO THE EMAIL ID OF YOUR MATHS TEACHER
- ▶ LAST DATE OF SUBMISSION : 26.10.21

STEPS




STEP 1

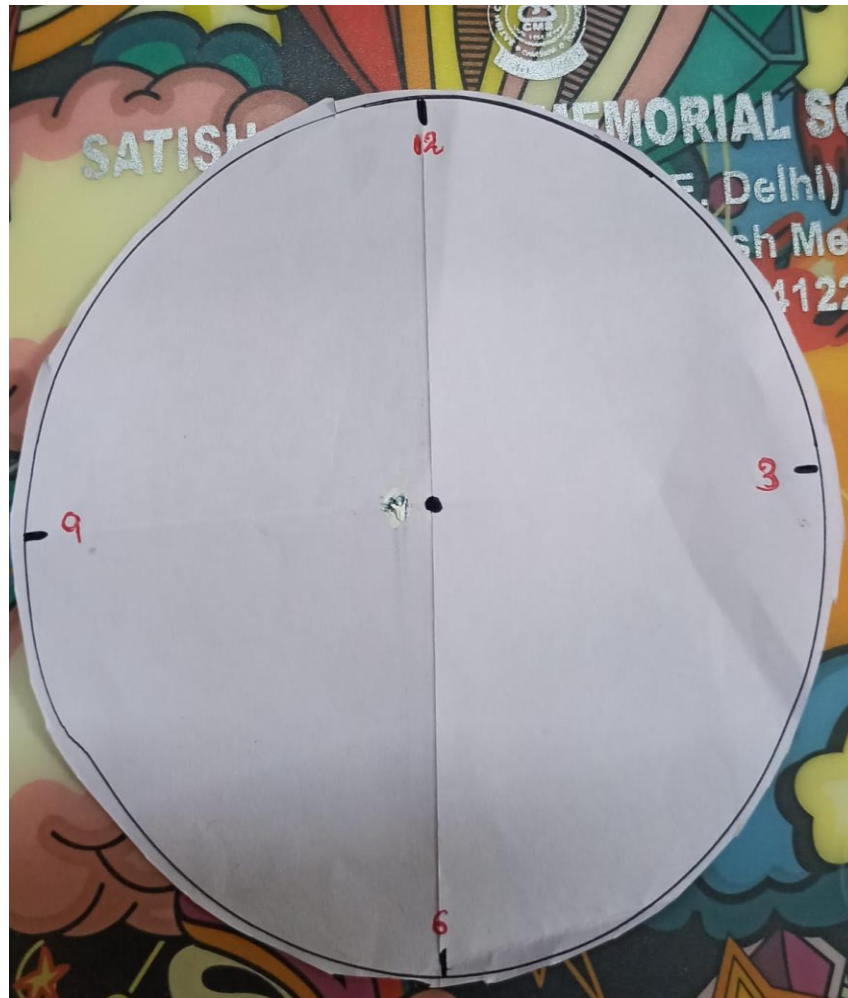


STEP2

STEPS

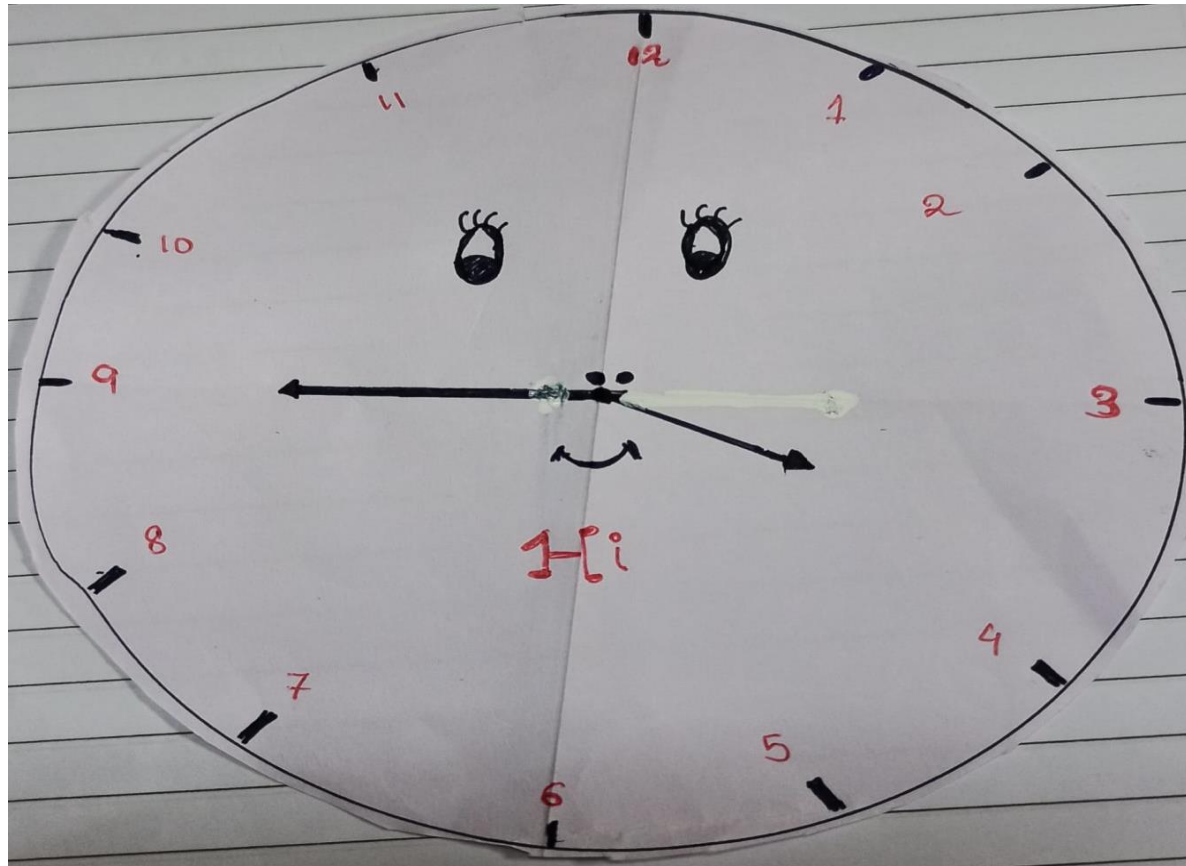


STEP3



STEP4

3:45



THANK YOU