



Satish Chandra Memorial School
Maths Worksheet
L.K.Gr.

Name: _____ Sec: _____ Roll: _____


1) Colour the books of the rectangle shaped shelf.



Now write, how many books are there in the rectangular shaped shelf :

T	O

2) Draw any object of square shape, you have seen at your home.



3) Colour the big Δ in the colour of cabbage and the small \square in the colour of apple.

