

# SATISH CHANDRA MEMORIAL SCHOOL

## MENTAL MATHS WORKSHEET

### CLASS – I

1) Put the correct sign '>' or '<'

29  44

2) Write the number that comes before thirty \_\_\_\_\_.

3) How many months name begin with letter 'M'? \_\_\_\_\_

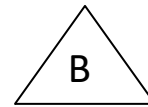

4) When do you eat lunch? Tick (√) the correct option.

(a) Morning (      )      (b) Afternoon (      )      (c) Night (      )

5) Which shape covers less space? Tick (√) the correct option.

(a) Shape A (      )

(b) Shape B (      )



6) Which is heavier a bucket of sand or a bucket of cotton? Tick (√) the correct option.

(a) Sand (      )

(b) Cotton (      )

(c) Both are same (      )

7) Will this shape fit into A, B or C? Tick (√) the correct option.



(a) C (      )

(b) A (      )

(c) B (      )

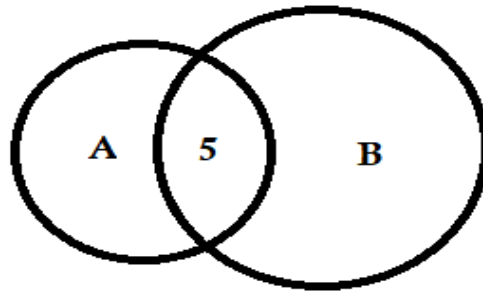
8) 4 hundred + 6 tens + 4 ones : \_\_\_\_\_

9) Is 5 in circle A, circle B or both? Tick (✓) the correct option.

(a) Circle A (    )

(b) Circle B (    )

(c) Both (    )



10) Colour the arrow that points to the right side.

