

# SATISH CHANDRA MEMORIAL SCHOOL

## ANSWERS OF MENTAL MATHS WORKSHEET

### CLASS – I

1) Put the correct sign '>' or '<'

29  44

2) Write the number that comes before thirty. 29

3) How many months name begin with letter 'M'? **TWO**

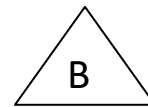

4) When do you eat lunch? Tick (√) the correct option.

(a) Morning ( )      (b) Afternoon (  )      (c) Night ( )

5) Which shape covers less space? Tick (√) the correct option.

(a) Shape A ( )

(b) Shape B (  )




6) Which is heavier a bucket of sand or a bucket of cotton? Tick (√) the correct option.

(a) Sand (  )

(b) Cotton ( )

(c) Both are same ( )

7) Will this shape fit into A, B or C? Tick (√) the correct option.



(a) C ( )

(b) A (  )

(c) B ( )

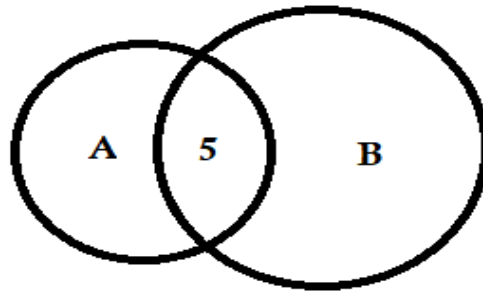
8) 4 hundred + 6 tens + 4 ones : **464**

9) Is 5 in circle A, circle B or both? Tick (✓) the correct option.

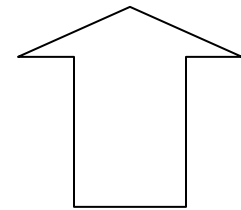

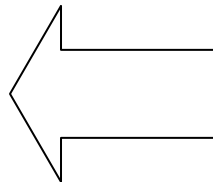
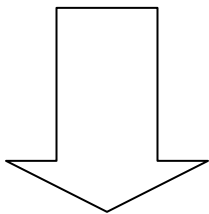
(a) Circle A (     )

(b) Circle B (     )

(c) Both ( ✓ )



10) Colour the arrow that points to the right side.



**N.B:** H/W – Page no. 24, 25 and 26 (do the homework in book only)