

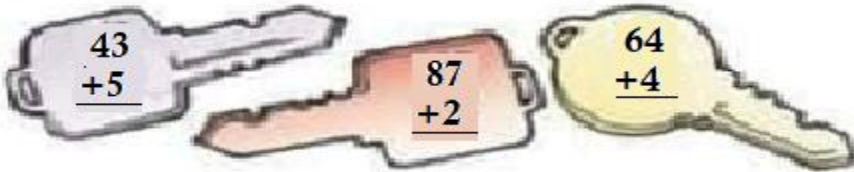
SATISH CHANDRA MEMORIAL SCHOOL

CLASS – I

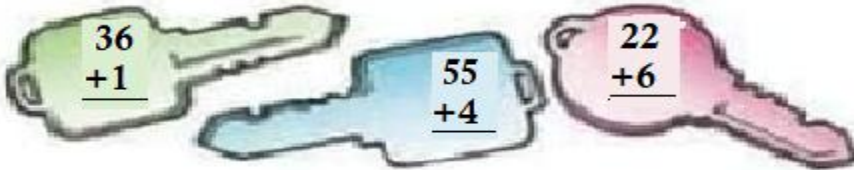
MATHS WORKSHEET – 11

Add and then follow the clue to find the right key. Write the correct answer in the key hole.

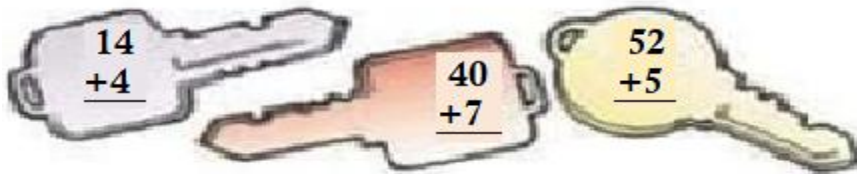
1. Find the key with the greatest number in the tens place.



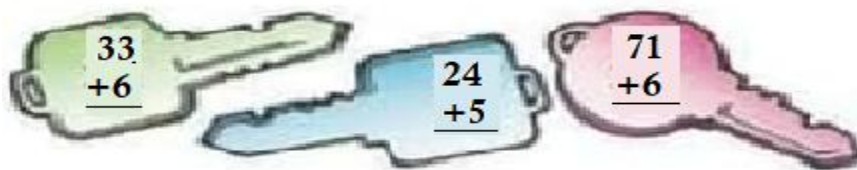
2. Find the key with the greatest number in the ones place.



3. Find the key with the number 4 in the tens place.



4. Find the key with the number 7 in the ones place.



5. Find the key with the same number in the ones and tens place.

