

SATISH CHANDRA MEMORIAL SCHOOL

CLASS-III SUBJECT: MATHEMATICS

WORKSHEET: 20


1) WHICH OF THE FOLLOWING IS A 2-D SHAPE?

A) TRIANGLE B) CUBOID

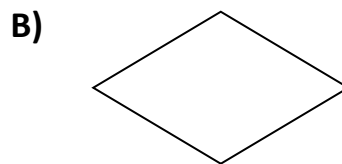
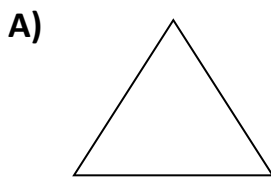
2) I AM A 2-D SHAPE MY PARALLEL SIDES ARE OF EQUAL LENGTH. WHO AM I?

A) RECTANGLE B) SQUARE

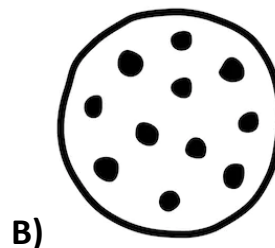
3) LOOK AT THE FOLLOWING SHAPES.WHICH SHOWS PAIR OF RECTANGLE.



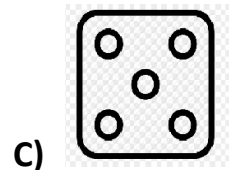
4) WHICH SHAPE HAS FEWER (LESSER THAN) 4 SIDES.



5) WHICH OF THE FOLLOWING IS AN EXAMPLE OF A TRIANGLE?



6) WRITE THE NAME OF THE SHAPE WHICH IS SIMILAR TO THE SHAPE OF THE GIVEN OBJECTS BELOW.



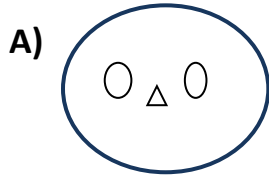
7) A SHAPE WHICH HAS NO EDGE (SIDE) IS ?

- A) CIRCLE B) TRIANGLE

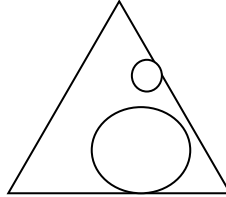
8) A SHAPE IN WHICH ALL 4 SIDES ARE OF SAME LENGTH IS....

- A) RECTANGLE B) SQUARE

9) WHICH FIGURE CONTAINS EXACTLY THREE CIRCLES?



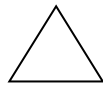
B)



10) WHICH OF THE FOLLOWING IS DIFFERENT FROM THE OTHER THREE?



B)



C)



D)

