

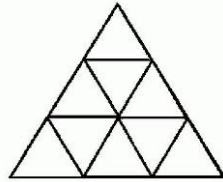
# **SATISH CHANDRA MEMORIAL SCHOOL**

**Class test: - 5**

**Chapter name: - Shapes and designs**

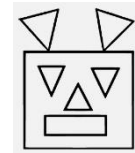
**Q. A) Answer the following questions: -**

**1. Find the number of triangles in the given figure: -**



- a) 13      b) 27      c) 23      d) none of these

**2. The figure is made up of ----- triangles, -----**



squares and ----- rectangles.

- a) 5,1,1      b) 1,5,1      c) 1,1,5      d) 6,5,1

**3. Number of end points in a line ---**

- a) 0      b) 6      c) 5      d) infinite

**4. which shape made up of 6 squares?**

- a)      b)      c)      d) none of these




5. Number of sides in 3 triangles are –

- a) 3      b) 12      c) 9      d) 15

6. How many plane faces are there in a cylinder?

- b) 1      b) 3      c) 4      d) 2

7. How many rectangles are there in a cuboid?



- a) 6      b) 4      c) 5      d) 8

8. Guess who am I?

- i) I have only one vertex.
- ii) People used me in birthday purpose.
- iii) I have one curved face.

9. Guess who am I?

- i) I have no definite length.
- ii) I have no end points.
- iii) I can move in both the direction.

10. Give some examples of the following: -

- a) cube: -
- b) cuboid: -
- c) sphere: -
- d) cone: -

