

# **SATISH CHANDRA MEMORIAL SCHOOL**

**ONLINE CLASS (H.W), DATE: - 22.06.2020**

**Chapter: - where to look from?**

**Answer the following: -**

**Q.A**

Question figure:



Answer figures:



(1)



(2)

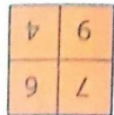
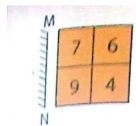


(3)

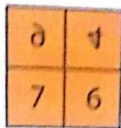


(4)

**Q.B which one is correct?**



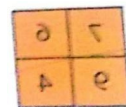
(1)



(2)



(3)



(4)

**Q.C List the alphabet which have one line of symmetry.**

**Q.D When your mom make a sandwich for your tiffin, then which line of symmetry she used to cut the bread into two equal halves ?**

Q.E Draw the line of symmetry ( if exists) . And mention the type of line of symmetry.

