

SATISH CHANDRA MEMORIAL SCHOOL

Mental Maths

1. Write true or false .

a. $16 + 7 = 18 + 8$ _____

b. $20 - 5 = 16 - 1$ _____

2. Find the missing number.

26 , 30 , 34 , _____ , 42 , _____

3. 6 less than 32 = _____ tens + _____ ones.

4. Write the even number between 51 to 68 and arrange in ascending order.

5. Identify the correct 3- digit number in which the digit in its hundreds place is (7 - 2)

695 , 592 , 735

6. Write the missing number .

$22 - 3 = 19 -$ _____

7. 3 tens + 45 = _____


8. Smallest 3-digit number + smallest 2-digit number = _____

9. Draw a line to cut this square into two equal rectangle.



10. Lily has 54 chocolates. Her mother give 28 chocolates more. Find the total number of chocolates.


Answer



1. 5 hundreds, 2 ones and 5 tens
will make 552.

2.

Name, Count and Color the Shapes



Triangle - 17


3. There are 24 balls in a box.
Ankit takes 12 balls. Now
how many balls are left?

$$\underline{\underline{24 - 12 = 12}}$$

4. 9 less than 38 is 29.



5. *What is the shape of your ruler?*



Rectangle