

SATISH CHANDRA MEMORIAL SCHOOL

CLASS III WORKSHEET: 46

CHAPTER : 6 (GIVE AND TAKE)

TOPIC : SUBTRACTION USING NUMBER LINE

1. Subtract using number line : -

A) $7 - 3 = ?$

B) $9 - 4 = ?$

C) $13 - 7 = ?$

D) $14 - 7 = ?$

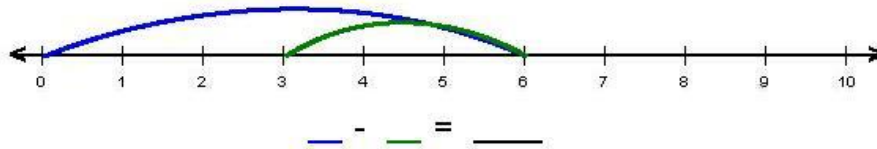
E) $42 - 22 = ?$

F) $58 - 38 = ?$

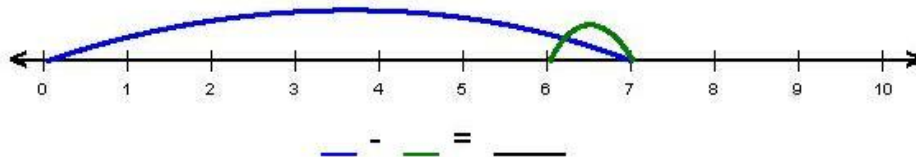
G) $60 - 56 = ?$

2. Fill ups :

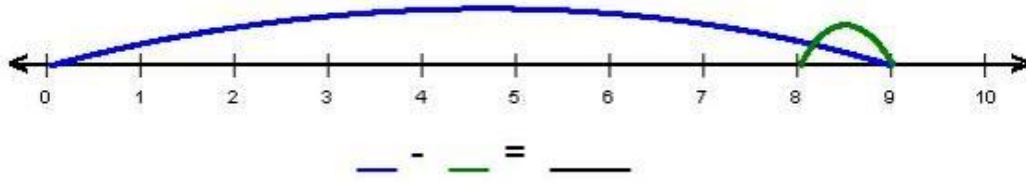
a)



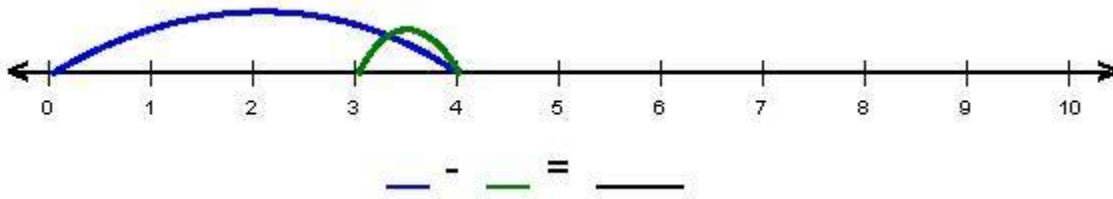
b)



c)



d)



e)

