

UKG MATHS

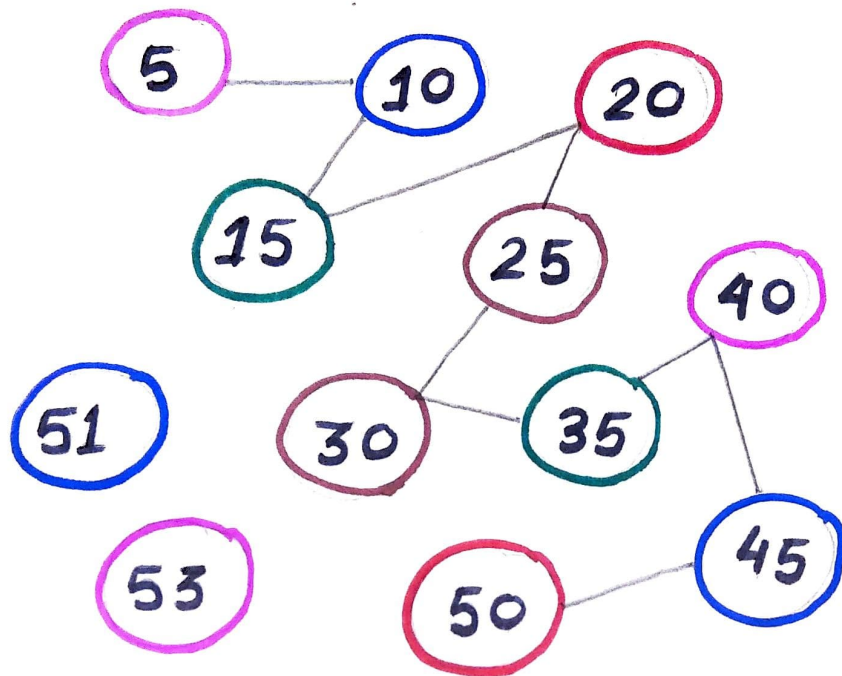
WORKSHEET

ON

ADDITION AND

TABLE OF 5 & 6

Follow the table of 5 and join the circle.




## Addition

$$\begin{array}{r} \text{T O} \\ + \quad 6 \\ \quad 4 \\ \hline \\ \hline \end{array}$$

$$\begin{array}{r} \text{T O} \\ + \quad 7 \\ \quad 2 \\ \hline \\ \hline \end{array}$$

$$\begin{array}{r} \text{T O} \\ + \quad 5 \\ \quad 3 \\ \hline \\ \hline \end{array}$$

• Colour the Circles that has 12 Placed in it.










$$6 + 6 = 12$$

$$7 + 3 = \bigcirc$$

$$8 + 4 = \bigcirc$$

$$9 + 3 = \bigcirc$$



- 15 
- 35 
- 18 
- 20 
- 42 
- 40 
- 54 