

**Satish Chandra Memorial School**

**Class III ( Mathematics)**

**Ch: 11 ( Jugs and mugs)**

**Worksheet: 55**

**Q.1 what is capacity?**

**Q.2 we measure the capacity of .....( solid / liquid) .**







**Q.3 The standard unit of capacity is ..... ( Litre / Milliliters) .**

**Q.4 Smaller capacity measured in .....( litre / Milliliters) .**

**Q.5 Circle the object which can hold large quantity of liquid.**



**Q.6 Choose the most suitable units of capacity litre or millilitres .**

a. a bottle of hair oil-----	
b. a glass of juice -----	
c. a bottle of cough syrup-----	
d. a diesel can -----	
d. a bottle of milk -----	
e. a bucket of water -----	

**Q.7 Match the following:**

About 12 litres



Less than  $\frac{1}{2}$  litre



About 5 litres



1000 litres



$\frac{1}{2}$  litre



**Q.8 Write the quantity of the liquid in the following jugs :**

